



TALLER DE GEOMETRIA OCTAVO PERIODO 3

Hallar el Área y el perímetro de las figuras cuando sea posible.

1.



7 dm

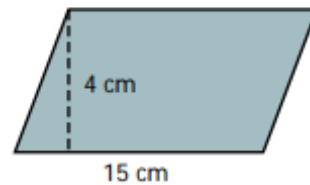
$$A = 7 \times 7 = 49 \text{ dm}^2$$

8 cm



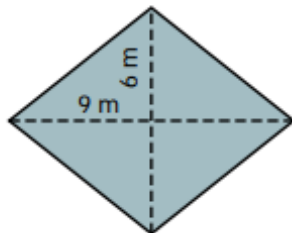
12 cm

$$A =$$

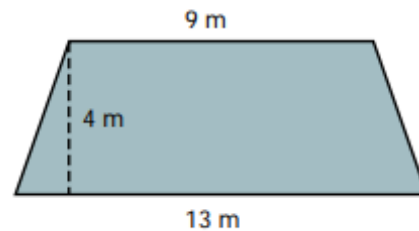


15 cm

$$A =$$



$$A =$$

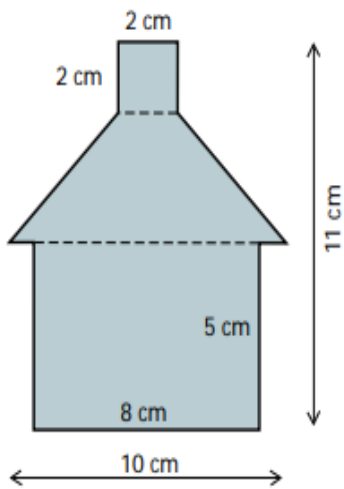


9 m

13 m

$$A =$$

Hallar el área de toda la figura



· Área del cuadrado =

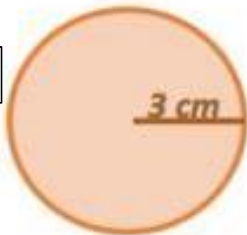
· Área del trapecio =

· Área del rectángulo =

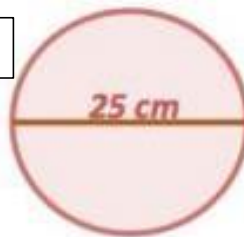
· Área de la figura =

HALLAR EL AREA DE LOS CIRCULOS

1



2



3



4

